




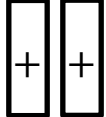

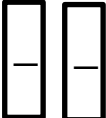

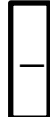

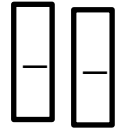


Determine how much one unit is in each of the objects shown. For example, how much is 1 money bag? 

<p>1.  =  27</p>	<p>2.  =  98</p>
<p>3.   =  </p>	<p>4.   = </p>
<p>5. $3x + 5 = 2x - 3$</p>	<p>6. $2x - 4 = -x + 11$</p>
<p>7. $-2x - 4 = 4x + 12$</p>	<p>8. $-3x + 5 = -x + 7$</p>
<p>9. You have \$12.50 in a savings account. You deposit \$7.25 more each week. Your friend has \$32.50 in a savings account. She deposits \$5.25 more each week. In how many weeks will the amount of money in the accounts be equal?</p>	<p>10. A town has accumulated 5 inches of snow, and the snow depth is increasing by 6 inches every hour. A nearby town has accumulated 6 inches, and the depth is increasing by 2 inches every hour. In about how many hours will the snowfall of the towns be equal?</p>

