

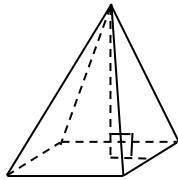
Goal: I will be able to _____

Tool Bag

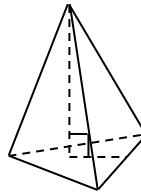
Formulas,
equations,
vocabulary, etc.

Here's How...Notes & Examples

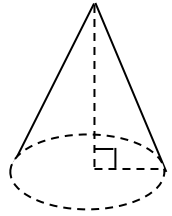
Rectangular pyramid



Triangular Pyramid



Cone



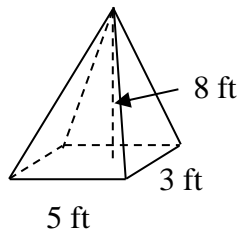
Pyramids

Cones

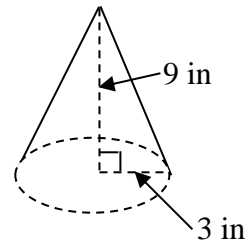
Example #1

Find the volume of each figure:

a)



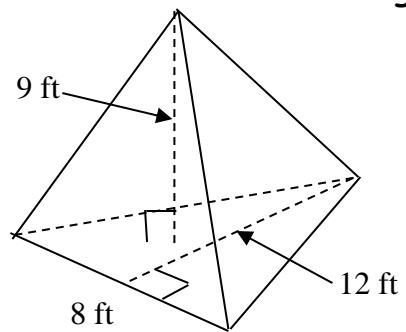
b)



You Try

Find the volume of each figure:

a)



b)

