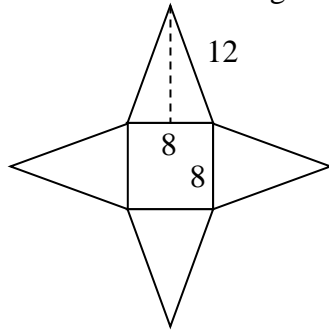
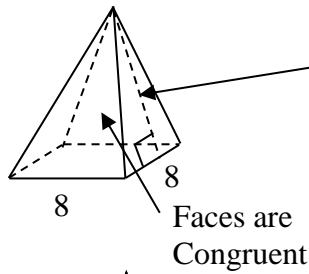


**Goal:** I will be able to \_\_\_\_\_

**Tool Bag**  
Formulas,  
equations,  
vocabulary, etc.

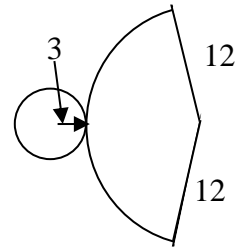
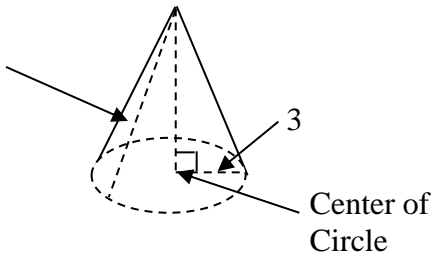
### Here's How...Notes & Examples

#### Regular pyramid



#### Right Cone

Slant Height = 12"

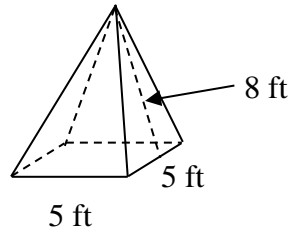


**Surface Area**  $S = \text{Base Area} + \text{Triangle Areas}$     $S = \text{Area of the base} + \text{Lateral Area}$

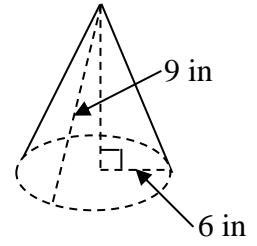
# You Try

Find the surface area of each figure:

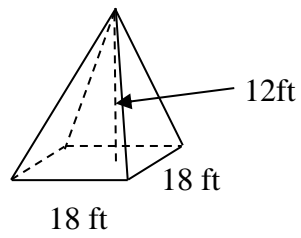
a)



b)



c)



d)

